

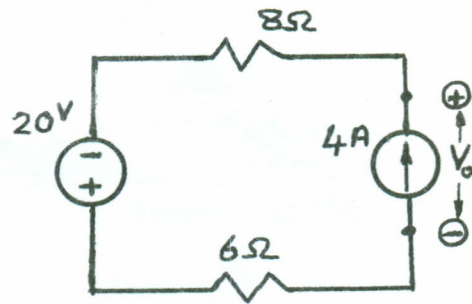
Mansoura University	Electric Circuits (1)
Faculty of Engineering	1 st Year Elec. Engineering Dept.
January 2011	Time allowed: 3 Hours

PART "A"(each part Carries 60 Marks)

PLEASE ANSWER ALL QUESTIONS

First Question (6 Marks)

For the shown circuit;
a-determine V_o .
b-is the 4A-current source active or passive element?

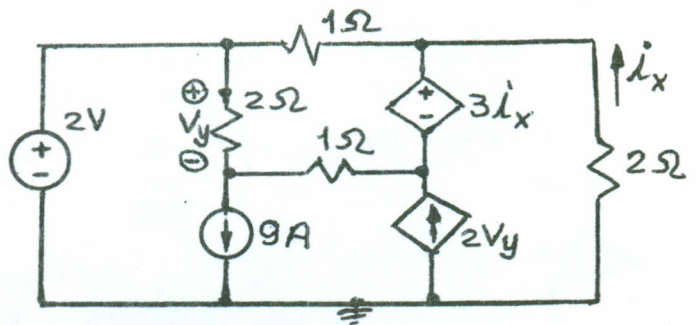


Second Question (18 Marks)

For the shown circuit, write the necessary and enough equations to get

V_y and i_x (without solving it) using;

- a- Mesh-current analysis method.
- b- Nodal-voltage analysis method.

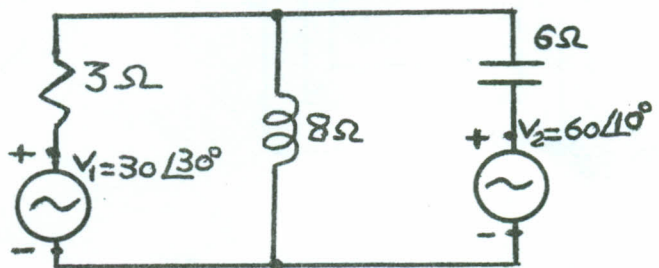
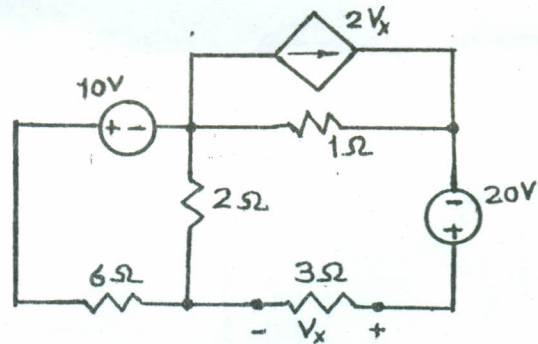


Third Question (12 Marks)

For the shown circuit, determine the current passing through the 2Ω-resistor using **Thevenin's theorem**.

Fourth Question (12 Marks)

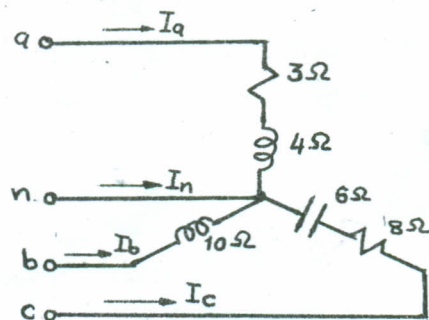
Determine the current passing through the inductance given in the shown circuit.



Fifth Question (12 Marks)

The voltage supplying for the shown three-phase load is 200 volt. Determine;

- a-the line currents.
- b-the neutral-wire current.
- c-the three-phase power.



Good Luck.....

Kamal shebl